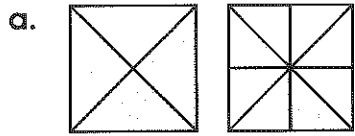


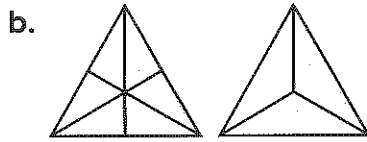
Name: _____

Equivalent Fractions

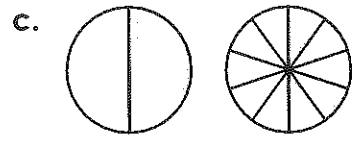
Fill in the missing fraction parts.



$$\frac{3}{4} = \frac{\quad}{8}$$



$$\frac{4}{6} = \frac{\quad}{3}$$



$$\frac{1}{2} = \frac{\quad}{10}$$

d.
$$\frac{6}{12} = \frac{\quad}{6}$$

e.
$$\frac{1}{3} = \frac{\quad}{6}$$

f.
$$\frac{1}{6} = \frac{\quad}{12}$$

g.
$$\frac{5}{10} = \frac{\quad}{6}$$

h.
$$\frac{2}{3} = \frac{\quad}{9}$$

i.
$$\frac{2}{4} = \frac{\quad}{6}$$

j.
$$\frac{1}{4} = \frac{\quad}{12}$$

k.
$$\frac{6}{9} = \frac{\quad}{3}$$

l.
$$\frac{2}{5} = \frac{\quad}{10}$$

m.
$$\frac{6}{8} = \frac{\quad}{12}$$

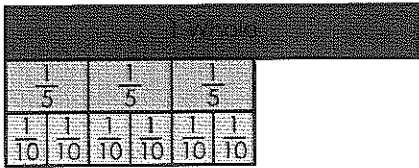
n.
$$\frac{5}{7} = \frac{\quad}{14}$$

o.
$$\frac{14}{16} = \frac{\quad}{8}$$

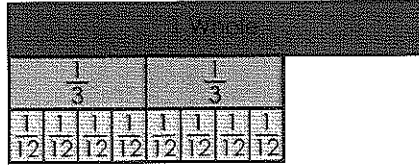
Name: _____

Fractions

Fill in the missing numerator from each fraction.



$$\frac{3}{5} = \frac{\quad}{10}$$

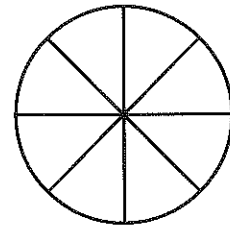




$$\frac{2}{3} = \frac{\quad}{12}$$

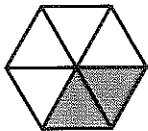


$$\frac{1}{4} = \frac{\quad}{8}$$


Color $\frac{3}{4}$ of each shape.



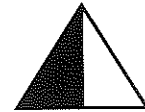
Write three equivalent fractions for the shaded portion of each illustration.



_____ = _____ = _____



_____ = _____ = _____



_____ = _____ = _____

Circle the fractions that are in simplest form. Write the simplest form of each fraction that can be simplified.

$$\frac{1}{4}$$

$$\frac{6}{8}$$

$$\frac{6}{12}$$

$$\frac{2}{3}$$

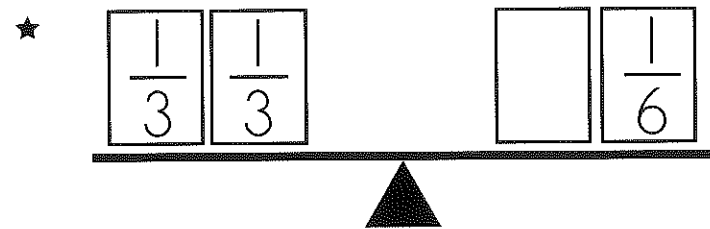
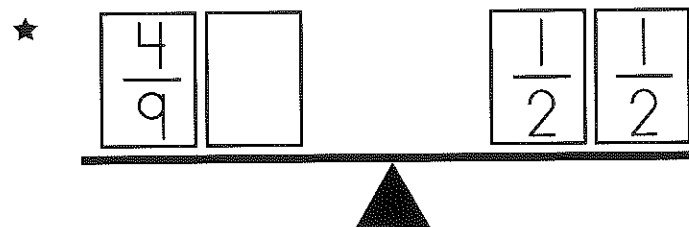
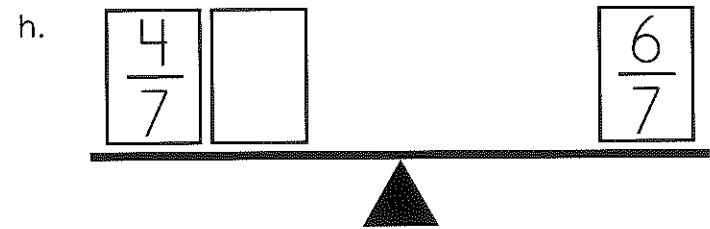
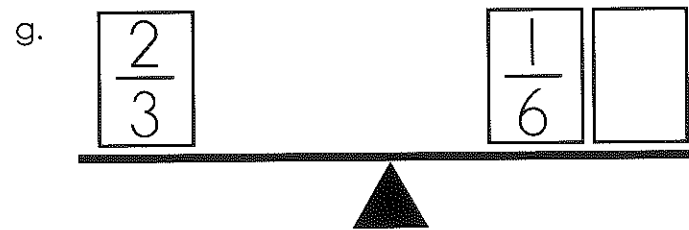
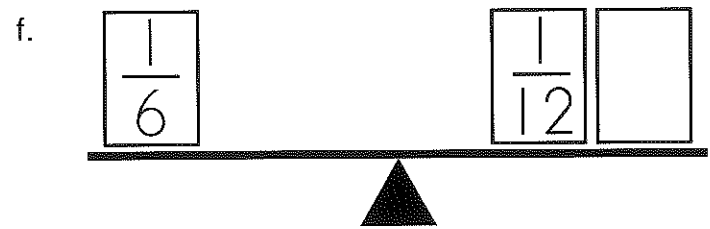
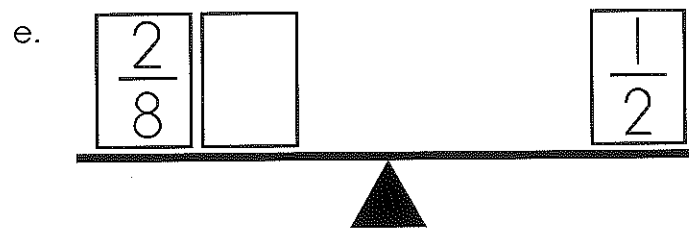
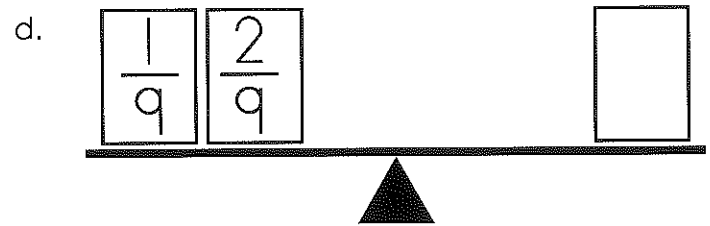
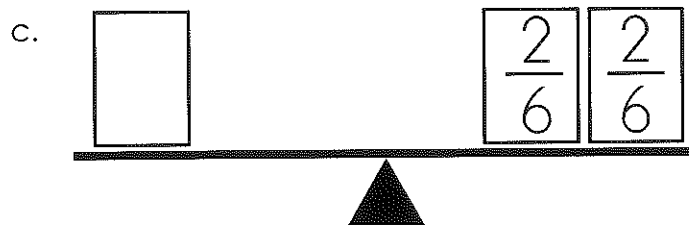
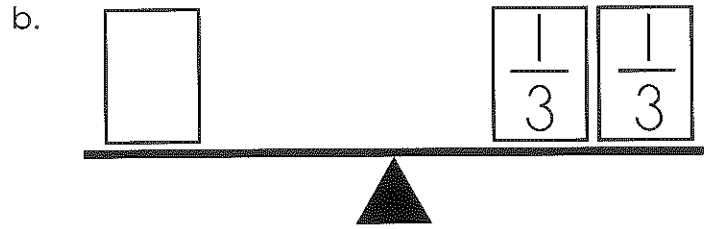
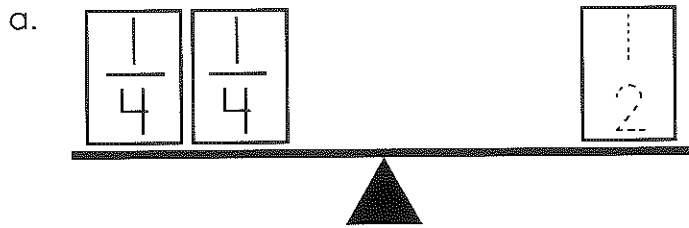
$$\frac{4}{10}$$

$$\frac{5}{8}$$

Name: _____

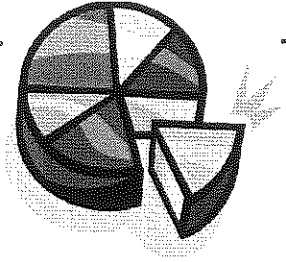
Balance the Scales

Make the scales balance by filling in the correct fractions.



Name: _____

Simplifying Fractions



Simplify each fraction.

a. $\frac{2}{8} =$

b. $\frac{4}{10} =$

c. $\frac{3}{6} =$

d. $\frac{4}{12} =$

e. $\frac{7}{14} =$

f. $\frac{2}{20} =$

g. $\frac{3}{9} =$

h. $\frac{6}{9} =$

i. $\frac{8}{10} =$

j. $\frac{5}{15} =$

k. $\frac{8}{72} =$

l. $\frac{5}{20} =$

m. $\frac{4}{6} =$

n. $\frac{21}{28} =$

o. $\frac{4}{18} =$

p. $\frac{33}{55} =$

q. What is $\frac{3}{18}$ written in simplest form? Explain how you found your answer.
